

Problèmes pour TD1 et TD2 se trouvant seulement dans 5^{ème} édition du livre de Cengel et Boles

2-19C A room is heated by an iron that is left plugged in. Is this a heat or work interaction? Take the entire room, including the iron, as the system.

2-20C A room is heated as a result of solar radiation coming in through the windows. Is this a heat or work interaction for the room?

2-21C An insulated room is heated by burning candles. Is this a heat or work interaction? Take the entire room, including the candles, as the system.

2-37 Water is being heated in a closed pan on top of a range while being stirred by a paddle wheel. During the process, 30 kJ of heat is transferred to the water, and 5 kJ of heat is lost to the surrounding air. The paddle-wheel work amounts to 500 N · m. Determine the final energy of the system if its initial energy is 10 kJ. *Answer:* 35.5 kJ

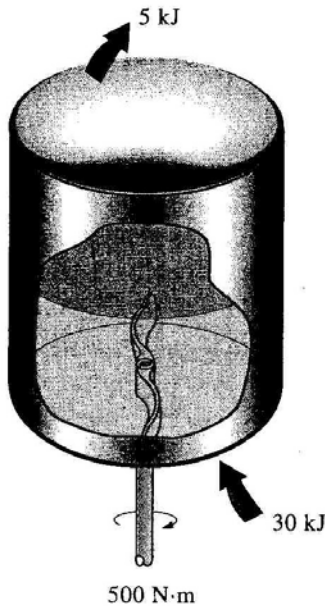


FIGURE P2-37

4-23 A piston-cylinder device contains 50 kg of water at 250 kPa and 25°C. The cross-sectional area of the piston is 0.1 m². Heat is now transferred to the water, causing part of it to evaporate and expand. When the volume reaches 0.2 m³, the piston reaches a linear spring whose spring constant is 100 kN/m. More heat is transferred to the water until the piston rises 20 cm more. Determine (a) the final pressure and temperature and (b) the work done during this process. Also, show the process on a P-V diagram. *Answers:* (a) 450 kPa, 147.9°C, (b) 44.5 kJ

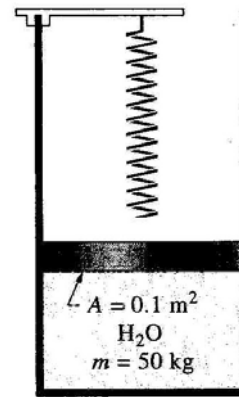


FIGURE P4-23

4-32 An insulated tank is divided into two parts by a partition. One part of the tank contains 2.5 kg of compressed liquid water at 60°C and 600 kPa while the other part is evacuated. The partition is now removed, and the water expands to fill the entire tank. Determine the final temperature of the water and the volume of the tank for a final pressure of 10 kPa.

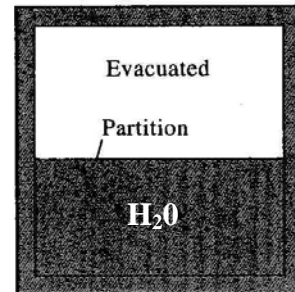


FIGURE P4-32

4-71 A piston-cylinder device contains 4 kg of argon at 250 kPa and 35°C. During a quasi-equilibrium, isothermal expansion process, 15 kJ of boundary work is done by the system, and 3 kJ of paddle-wheel work is done on the system. Determine the heat transfer for this process.